


Junior Practice Sprint Round (Nemeth)

1. Three and eight-ninths minus two and five-sixths equals one and one-eighteenth.


$$3\frac{8}{9} - 2\frac{5}{6} = 1\frac{1}{18}$$



Nemeth Braille representation of the equation: $3\frac{8}{9} - 2\frac{5}{6} = 1\frac{1}{18}$. The equation is represented in Nemeth Braille across three lines of dots.

2. Point six is less than four-fifths.


$$.6 < \frac{4}{5}$$



Nemeth Braille representation of the inequality: $.6 < \frac{4}{5}$. The inequality is represented in Nemeth Braille across three lines of dots.

3. Eight squared minus fifty


$$8^2 - 50$$



Nemeth Braille representation of the expression: $8^2 - 50$. The expression is represented in Nemeth Braille across three lines of dots.

4. Thirty-five plus six multiplication dot seven


$$35 + 6 \cdot 7$$



Nemeth Braille representation of the expression: $35 + 6 \cdot 7$. The expression is represented in Nemeth Braille across three lines of dots.


5. Four open parenthesis two multiplication cross seven close parenthesis

$$4(2 \times 7)$$




6. Two y plus six equals fifteen.

$$2y + 6 = 15$$




7. Open parenthesis three-fourths close parenthesis squared is approximately equal to zero point five six.

$$\left(\frac{3}{4}\right)^2 \approx 0.56$$



8. Seventeen minus four open parenthesis three close parenthesis

$$17 - 4(3)$$



13. Three-eighths is less than one-half.

$$\frac{3}{8} < \frac{1}{2}$$

⠠⠼⠩⠨⠸⠠⠸⠠⠼⠥
⠠⠼⠩⠨⠸⠠⠸⠠⠼⠥
⠠⠼⠩⠨⠸⠠⠸⠠⠼⠥

14. One hundred eighty degrees

$$180^\circ$$

⠠⠼⠠⠠⠠⠠⠠
⠠⠼⠠⠠⠠⠠⠠

15. Six open parenthesis eighteen plus twelve close parenthesis

$$6(18 + 12)$$

⠠⠠⠠⠠⠠⠠⠠⠠⠠⠠⠠⠠⠠⠠⠠⠠⠠
⠠⠠⠠⠠⠠⠠⠠⠠⠠⠠⠠⠠⠠⠠⠠⠠⠠
⠠⠠⠠⠠⠠⠠⠠⠠⠠⠠⠠⠠⠠⠠⠠⠠⠠

16. Twenty-five equals five squared.

$$25 = 5^2$$

⠠⠠⠠⠠⠠⠠⠠⠠⠠⠠
⠠⠠⠠⠠⠠⠠⠠⠠⠠⠠
⠠⠠⠠⠠⠠⠠⠠⠠⠠⠠

